


Maths Challenge

twinkl

Maths Challenge



1. How many apples are there?



Maths Challenge



2. Below are the bedtimes of 3 friends. Who goes to bed the earliest?

John



Alice



Ruby



Maths Challenge



3. Look at the following pattern:



What comes next?

- a. 3 apples, 2 bananas
- b. 2 apples, 2 bananas
- c. 1 apple, 3 bananas




Maths Challenge



4. The mouse is _____ the cheese.

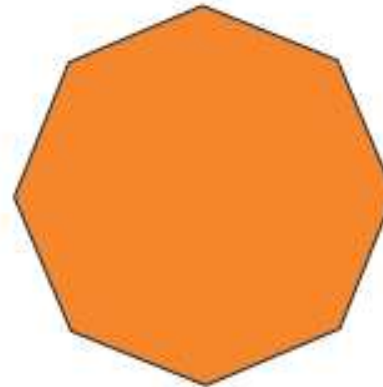
- a) beside b) behind c) inside



Maths Challenge



5. How many vertices does this shape have?



Maths Challenge



6. Can you work out:

$$30 + 40$$

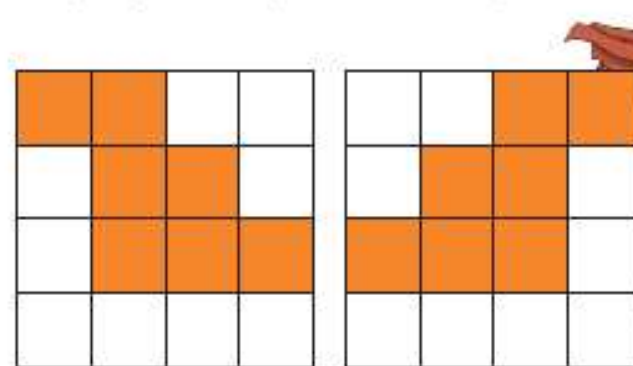


Maths Challenge



7. What has been done to this shape?

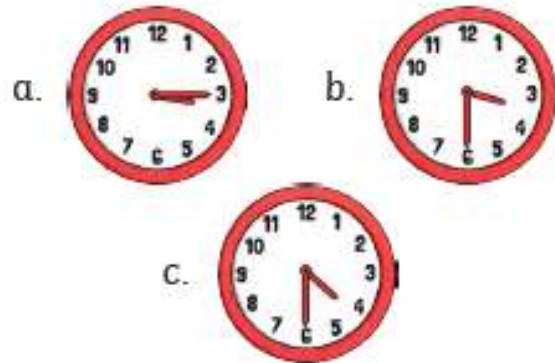
- a) slip b) slide c) turn



Maths Challenge



8. Toby went to see a film. It started at 2:00 and finished 2 and a half hours later. What time did it finish?



Maths Challenge



9. Find the answer to:

$$3 \div 3$$



Maths Challenge



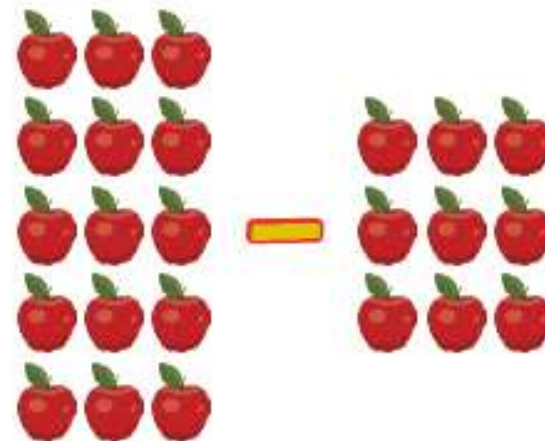
10. On what day of the week is the 18th day of the month?



Maths Challenge



11. Work out the following problem.



Maths Challenge



12. Divide the buns into each basket equally.
How many buns go in each basket?



Answers

1.25 apples

2. John

3. C

4. A – beside

5. 8 vertices

6. 70

7. C

8. B- 4.30

9. 1

10. Saturday

11. 6

12. 3 buns in each basket